

Name: \_\_\_\_\_

## Multiplication with Arrays

When you multiply, think of the multiplication symbol as having the meaning "rows of."

The fact  $3 \times 6$  would actually mean "3 rows of 6."


To solve this fact, draw 3 rows of 6 symbols.

x x x x x x  
x x x x x x  
x x x x x x

3 rows of 6 symbols equals 18 symbols.  
 $3 \times 6 = 18$

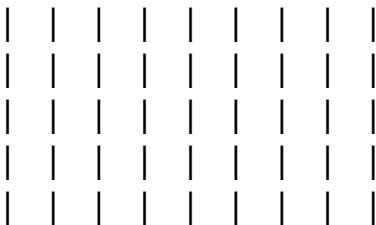
Symbols arranged in neat rows and columns are called arrays.

Look at each array. Count the symbols in each row and column carefully. Write the multiplication fact for each.

1. 


\_\_\_\_\_ rows of \_\_\_\_\_ equals \_\_\_\_\_

\_\_\_\_\_ x \_\_\_\_\_ = \_\_\_\_\_

2. 

\_\_\_\_\_ rows of \_\_\_\_\_ equals \_\_\_\_\_

\_\_\_\_\_ x \_\_\_\_\_ = \_\_\_\_\_

3. 

\_\_\_\_\_ rows of \_\_\_\_\_ equals \_\_\_\_\_

\_\_\_\_\_ x \_\_\_\_\_ = \_\_\_\_\_

**Now try this:** On the back of this paper, draw an array for each of these facts:

$7 \times 4$

$8 \times 3$

$9 \times 6$

$3 \times 7$

$8 \times 5$

# ANSWER KEY

## Multiplication with Arrays

When you multiply, think of the multiplication symbol as having the meaning "rows of."

The fact  $3 \times 6$  would actually mean "3 rows of 6."


To solve this fact, draw 3 rows of 6 symbols.

x x x x x x  
x x x x x x  
x x x x x x

3 rows of 6 symbols equals 18 symbols.  
 $3 \times 6 = 18$

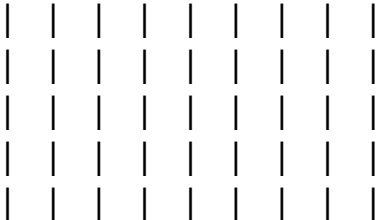
Symbols arranged in neat rows and columns are called arrays.

Look at each array. Count the symbols in each row and column carefully. Write the multiplication fact for each.

1. 


4 rows of 8 equals 32

$$\underline{4} \times \underline{8} = \underline{32}$$

2. 

5 rows of 9 equals 45

$$\underline{5} \times \underline{9} = \underline{45}$$

3. 

4 rows of 4 equals 16

$$\underline{4} \times \underline{4} = \underline{16}$$

**Now try this:** On the back of this paper, draw an array for each of these facts:

$7 \times 4$

$8 \times 3$

$9 \times 6$

$3 \times 7$

$8 \times 5$