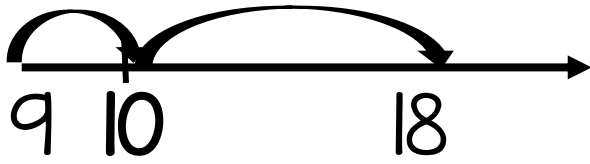
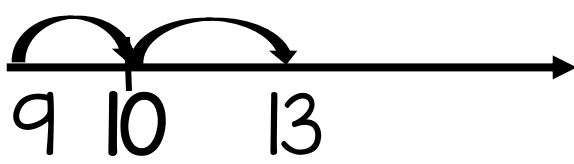


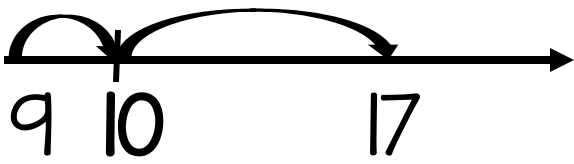
$$18 - 9 = \underline{\quad}$$



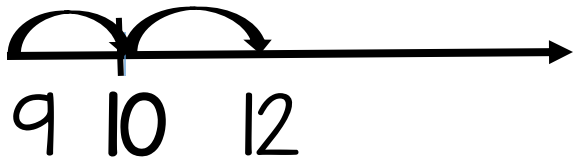
$$13 - 9 = \underline{\quad}$$



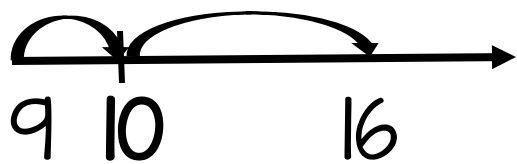
$$17 - 9 = \underline{\quad}$$



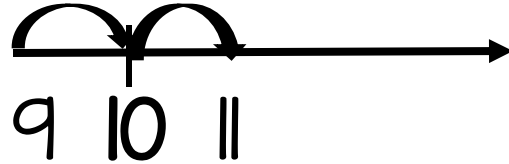
$$12 - 9 = \underline{\quad}$$



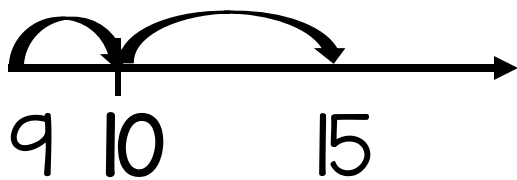
$$16 - 9 = \underline{\quad}$$



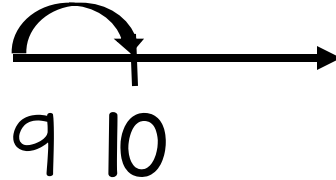
$$11 - 9 = \underline{\quad}$$



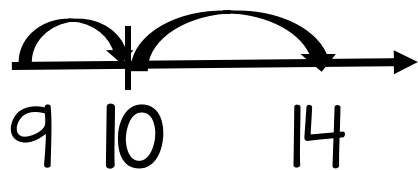
$$15 - 9 = \underline{\quad}$$



$$10 - 9 = \underline{\quad}$$



$$14 - 9 = \underline{\quad}$$



$$19 - 9 = \underline{\quad}$$

