


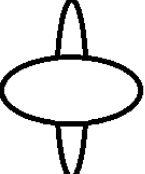




STORM DAY CHALLENGE March 10, 2020

QUESTION 1

Which of these diagrams could be drawn without taking the pen off the page and without drawing along a line already drawn?

a. <input type="radio"/>	
b. <input type="radio"/>	
c. <input type="radio"/>	

d. <input type="radio"/>	
e. <input type="radio"/>	
f. <input type="radio"/>	

Question 2

Daniel cuts four lawns each week, each measuring 20 by 30 feet, and gets paid \$0.15 for each square foot that he cuts. How much money will he make each week?